


## Topic 2: Ray Diagram Assignment

This assignment must be completed by hand, **NOT** digitally, then uploaded to OneNote

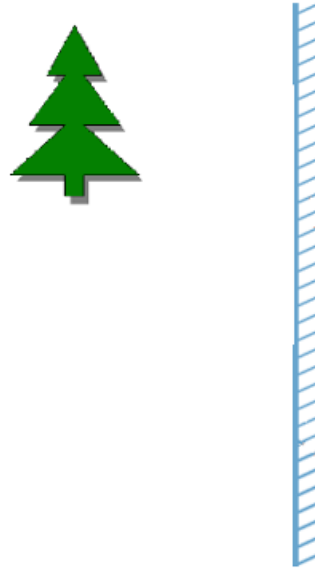
- Pick **ONE** of the diagrams below and use a ray diagram to show the image location
- **Colour code your rays**. I.e. An incident ray & its reflected ray should be the same colour.
- Be sure to clearly indicate all measured angles

/10


1.



2.



3.



4.

