

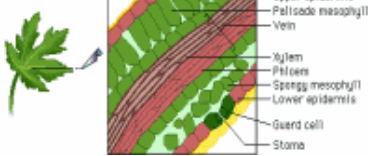
_____ of the chloroplast



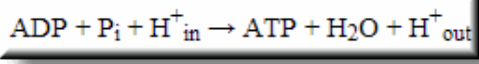
takes place in

_____ reactions

takes place in



makes these energy carrier molecules



which are used in the Calvin Cycle to make

_____ and _____

PhotoSynthesis Concept Map

_____ energy

is converted to

_____ energy

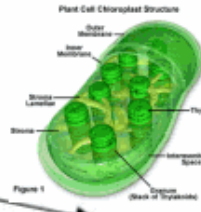
by the process of

ATP	NADPH	Solar	Carbohydrates
Chemical	Photosynthesis	Light	Stroma
Calvin	Thylakoid	Chloroplast	Hydrogen
Chlorophyll	Carbon Dioxide		

Divided into two stages

takes place in

which contain the green pigments



_____ of the Chloroplast

takes place in

_____ Cycle



combines

_____ and _____

to form

